

Queensland road signs quiz

Quiz Master's sheet

Test your knowledge of Queensland's road signs.

Question 1:

What is the name of the document that governs use of official traffic signs on Queensland roads?

- a) Manual of Uniform Traffic Control Devices
- b) Queensland's Official Book of Road Signs
- c) Guide to Queensland Road Signs

Answer: a) Manual of Uniform Traffic Control Devices

Question 2:

Road users can be penalised if they don't obey regulatory road signs.

- a) True
- b) False

Answer: a) True

Question 3:

What type of signs use a brown background and white design?

- a) Service and community facility signs
- b) Tourist attraction and drive signs
- c) Street name signs

Answer: b) Tourist attraction and drive signs

Question 4:

When passing a speed limit sign, what action must you take?

- a) You must not drive faster than the speed limit shown on the sign
- b) You must maintain your speed at the exact speed limit shown on the sign
- c) You must not drive faster than the speed limit shown on the sign only in wet weather

Answer: a) You must not drive faster than the speed limit shown on the sign

Question 5:

In Queensland, what speed limit applies in a built-up area if there are no speed limit signs?

- a) 40km/h
- b) 50km/h
- c) 60km/h

Answer: b) 50km/h

Question 6:

What is the only sign that exclusively uses an octagon shape?

- a) Give Way sign
- b) Roundabout sign
- c) Stop sign

Answer: c) Stop sign

Question 7:

What category of signs MUST you comply with?

- a) Information signs
- b) Regulatory signs
- c) Service and community facilities signs

Answer: b) Regulatory signs

Question 8:

A hand signal direction given by a Queensland police officer overrides a give way sign, stop sign or traffic light.

- a) True
- b) False

Answer: a) True

Question 9:

What shape is exclusively reserved for a railway or tramway crossing?

- a) Diagonal cross
- b) Rectangle
- c) Train carriage

Answer: a) Diagonal cross

Question 10:

What give way rules apply when a Shared Zone sign is displayed?

- a) Pedestrians must give way to all other road users
- b) All road users must give way to whoever was on the road first
- c) Drivers must give way to pedestrians

Answer: c) Drivers must give way to pedestrians



Question 11:

What does this sign indicate?

- a) There is a railway crossing on the side road
- b) There is a pedestrian crossing on the side road
- c) There is an overpass on the side road

Answer: a) There is a railway crossing on the side road



Question 12:

What does this sign indicate?

- a) You must not drive faster than the speed shown
- b) You must not drive slower than the speed shown
- c) It is advised that you drive at or below the speed shown

Answer: c) It is advised that you drive at or below the speed shown



Question 13:

What does this sign indicate?

- a) Pedestrians and bicycle riders must not use the path
- b) Pedestrians and bicycle riders must share the path
- c) Pedestrians and bicycle riders must only travel in the direction on the sign

Answer: b) Pedestrians and bicycle riders must share the path



Question 14:

What action must you take when approaching this sign?

- a) Drive to the right of a hazard
- b) Drive to the left of a hazard
- c) Drive either side of a hazard

Answer: a) Drive to the right of a hazard



Question 15:

When this sign is beside a road, what animal may be in the area?

- a) Racehorse
- b) Horses with a rider
- c) Brumby / wild horse

Answer: c) Brumby / wild horse



Question 16:

What does this sign indicate?

- a) Public bus stop
- b) Bus washing area
- c) Children getting on and off buses

Answer: c) Children getting on and off buses



Question 17:

What does this sign indicate?

- a) The road is closed ahead due to sand on the road
- b) The road surface may not be visible or slow to drive on because sand has drifted onto it
- c) You may see sand drifting beside the road

Answer: b) The road surface may not be visible or slow to drive on because sand has drifted onto it



Question 18:

What does this sign indicate?

- a) The bridge ahead is narrower than the road leading up to the bridge
- b) The road you are travelling on is about to reduce in width
- c) There are unsealed road shoulders ahead

Answer: a) The bridge ahead is narrower than the road leading up to the bridge



Question 19:

What does this sign indicate?

- a) You must turn left ahead
- b) The road ends straight ahead beyond the approaching intersection
- c) The road you are driving on turns left through the approaching intersection

Answer: c) The road you are driving on turns left through the approaching intersection



Question 20:

What does this sign indicate?

- a) You are driving on National Route 55
- b) You are driving on State Route 55
- c) The speed limit is 55km/h

Answer: b) You are driving on State Route 55




Question 21:

What does this sign indicate?

- a) The name of the road you are driving on begins with W and is 44 kilometres long
- b) You will arrive at a town or city beginning with W in 44 minutes
- c) You will arrive at a town or city beginning with W in 44 kilometres

Answer: c) You will arrive at a town or city beginning with W in 44 kilometres



Question 22:

What is this sign used to indicate?

- a) The depth of water flowing over a road
- b) The height of roadside vegetation
- c) The height of a low-level bridge

Answer: a) The depth of water flowing over a road



Question 23:

What does this sign indicate?

- a) A motorway median crossing for emergency vehicles
- b) No entry past this point
- c) You are entering an environmentally-sensitive area

Answer: a) A motorway median crossing for emergency vehicles



Question 24:

What does this sign indicate?

- a) A picnic area is ahead
- b) A place serving sit-down meals is ahead
- c) A camp kitchen with washing up facilities is ahead

Answer: b) A place serving sit-down meals is ahead



Question 25:

What does this sign indicate?

- a) Accommodation is available ahead
- b) A furniture shop is ahead
- c) It is time to stop driving and rest

Answer: a) Accommodation is available ahead



Question 26:

What does this sign indicate?

- a) A no-camera zone is ahead
- b) A scenic lookout is ahead
- c) A speed camera is ahead

Answer: b) A scenic lookout is ahead




Question 27:

What does this sign indicate?

- a) You are near a winery, wine tourism region, or wine tourist drive
- b) You are near a place where you can purchase fruit
- c) Fresh produce, including grapes, may be on the road

Answer: a) You are near a winery, wine tourism region, or wine tourist drive




Question 28:

What does this sign indicate?

- a) All drivers are permitted to park in the zoned area between 9am and 4pm
- b) A permit to park in the zoned area is not required between 9am and 4pm
- c) Drivers may only park within the zoned area between 9am and 4pm if they have a permit to do so

Answer: c) Drivers may only park within the zoned area between 9am and 4pm if they have a permit to do so



Question 29:

What does this sign indicate?

- a) You must not stop unless you are driving a bus, taxi or limousine and are dropping off or picking up passengers
- b) No vehicles are allowed to stop at any time
- c) Vehicles are allowed to stop for a maximum of five minutes

Answer: a) You must not stop unless you are driving a bus, taxi or limousine and are dropping off or picking up passengers



Question 30:

What does this sign indicate?

- a) You must switch off your engine if stopping within the signed zone between the times listed
- b) You must not stop your vehicle within the signed zone between the times listed
- c) You may only stop your vehicle for more than five minutes within the signed zone between the times listed

Answer: b) You must not stop your vehicle within the signed zone between the times listed

To refresh your knowledge of Queensland road signs, visit www.qld.gov.au/transport/safety/signs